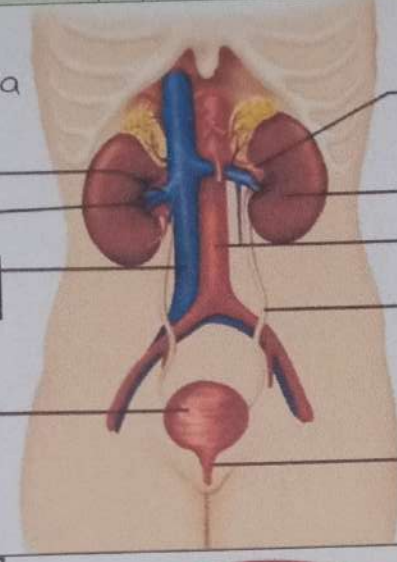
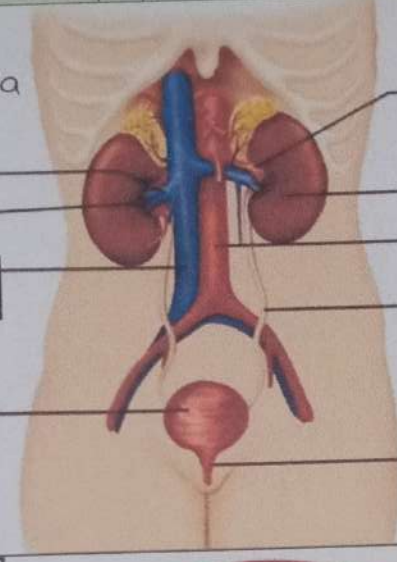
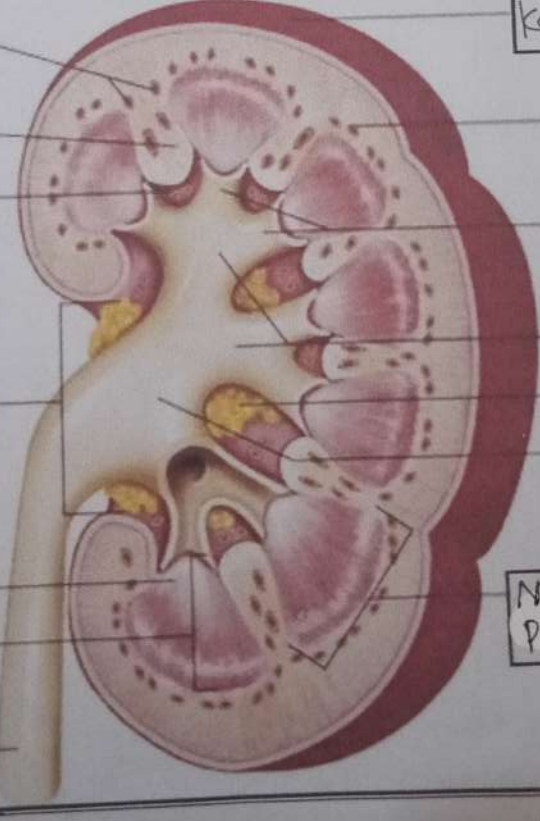
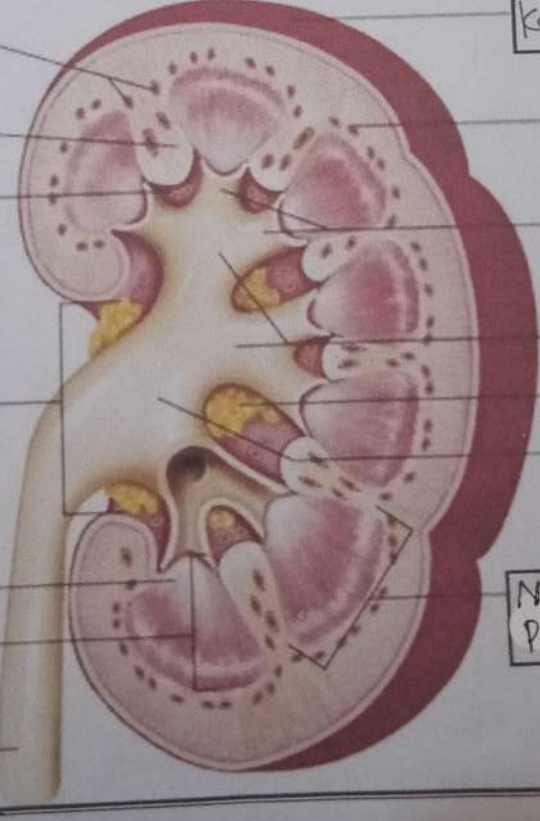


WORKSHEETS (LEMBAR KERJA)

Mata Kuliah	: Anatomi
Materi	: Anatomi Urinari
NIM>Nama Mahasiswa	: 2110101008 / PITA ANINGSIH

No	Keterangan	Pembahasan
----	------------	------------

1	 <p>Renal sinistra</p> <p>Hilum</p> <p>Inferior Vena cava</p> <p>Urinary bladder</p> <p>Vesica urinaria</p>	 <p>Renal dekstra</p> <p>Kidney</p> <p>Abdominal Aorta</p> <p>Ureter</p> <p>Urethra</p>
---	-----------------------------------------------------------------------------------------------------------------------------------------------------------------------------------------------	---------------------------------------------------------------------------------------------------------------------------------------------------------------------------

 <p>Interlobular Arteries</p> <p>Renal Column</p> <p>Renal sinus</p> <p>Hilum</p> <p>Renal Papilla of Pyramid</p> <p>Medulla</p> <p>Ureter</p>	 <p>Kapsul fibrous</p> <p>Cortex</p> <p>Minor calyx</p> <p>Mayor calyx</p> <p>Liposit</p> <p>Renal Pelvis</p> <p>Medulla Pyramid</p>
------------------------------------------------------------------------------------------------------------------------------------------------------------------------------------------------------------------------------------	--------------------------------------------------------------------------------------------------------------------------------------------------------------------------------------------------------------------------