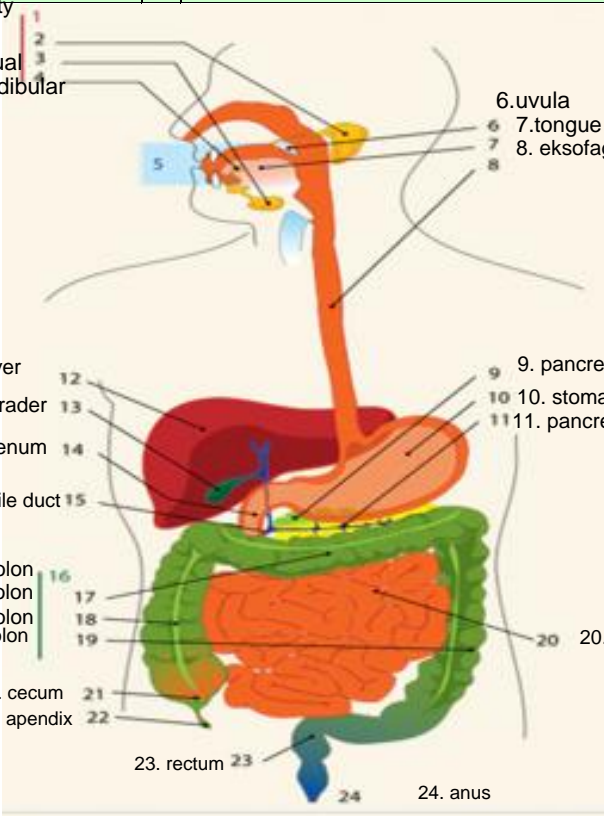
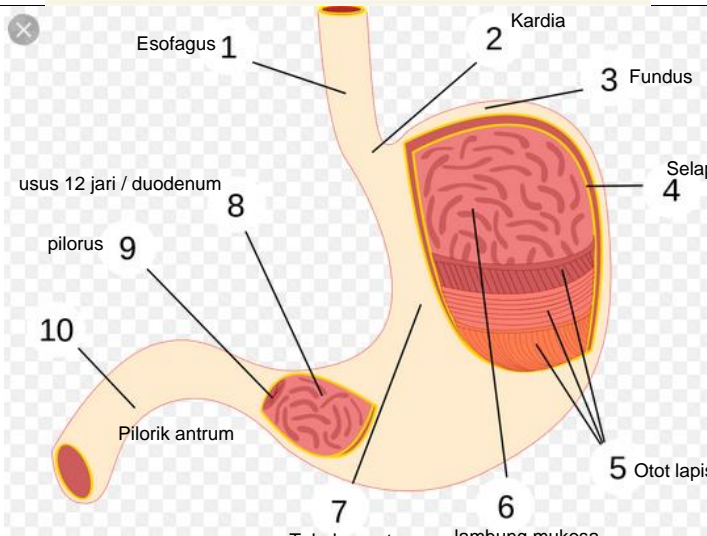
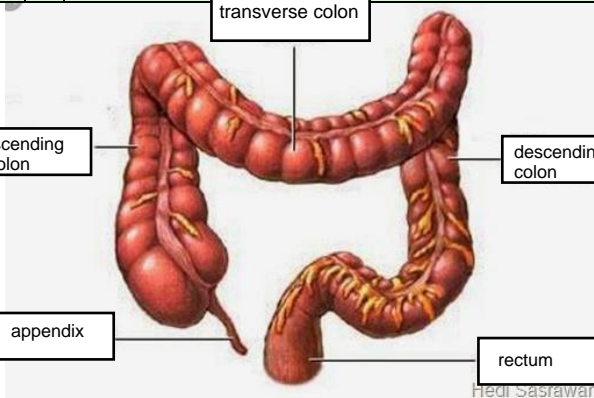


WORKSHEETS (LEMBAR KERJA)

Mata Kuliah	: Anatomi
Materi	: Anatomi Digesti
NIM>Nama Mahasiswa	:

No	Keterangan	Pembahasan
1	<p>oral cravity 2. parotid 3. sublingual 4. submandibular</p> 	
		

No	Keterangan	Pembahasan
		 <p>The diagram illustrates the large intestine (colon) and its associated structures. The main components are labeled as follows:</p> <ul style="list-style-type: none"> transverse colon: The upper horizontal part of the large intestine. ascending colon: The vertical part on the right side of the abdomen. descending colon: The vertical part on the left side of the abdomen. appendix: A small, finger-like projection from the junction of the ascending and transverse colons. rectum: The final straight part of the large intestine, leading to the anus. <p><small>Hedi Sasawari</small></p>