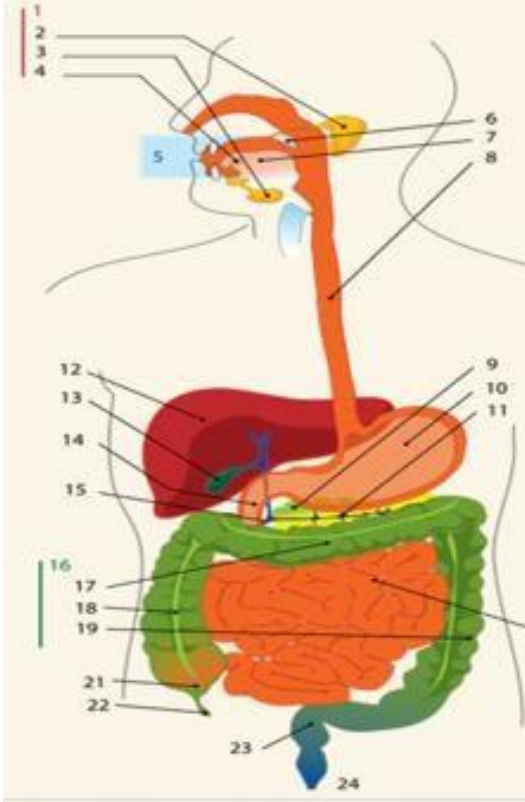
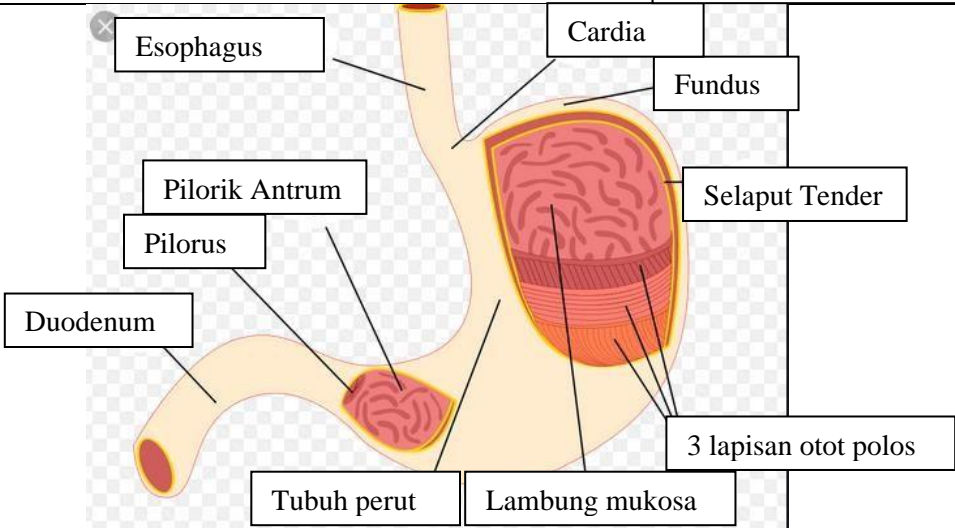
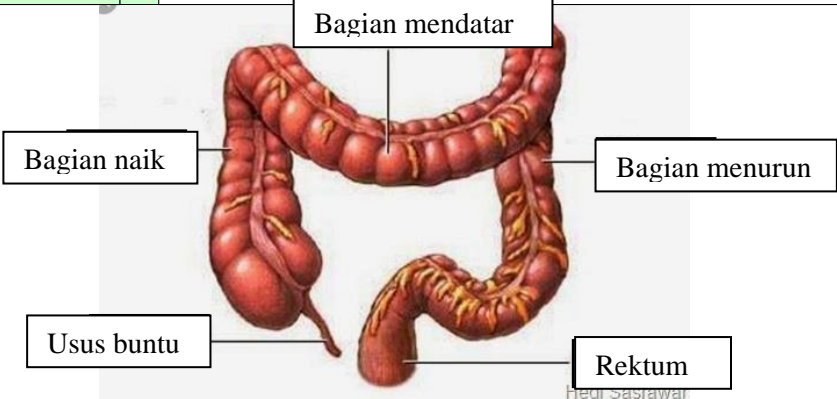


WORKSHEETS (LEMBAR KERJA)

Mata Kuliah	: Anatomi
Materi	: Anatomi Digesti
NIM>Nama Mahasiswa	: Bisyarotul Walidah /2110101031

No	Keterangan	Pembahasan
1		<p>Diagram sistem pencernaan</p> <ol style="list-style-type: none"> 1. Kelenjar ludah 2. Parotis 3. Submandibularis (bawah rahang) 4. Sublingalis (bawah lidah) 5. Romgga mulut 6. Amandel 7. Lidah 8. Esofagus 9. Pankreas 10. Lambung 11. Saluran prankeas 12. Hati 13. Kantung empedu 14. Duodenum 15. Saluran empedu 16. Kolon 17. Kolon tranversum 18. Kolonascenden 19. Kolon descenden 20. Ileum 21. Sekum 22. Apperidiks umbai cacing 23. Rektum/poros usus 24. Anus
		

No	Keterangan	Pembahasan
		 <p>The diagram illustrates the large intestine (colon) with the following labeled parts:</p> <ul style="list-style-type: none"> Bagian mendatar: The transverse colon, the upper horizontal part. Bagian naik: The ascending colon, the right vertical part. Bagian menurun: The descending colon, the left vertical part. Usus buntu: The cecum, the large pouch at the start of the large intestine. Rektum: The rectum, the final straight part of the large intestine.