
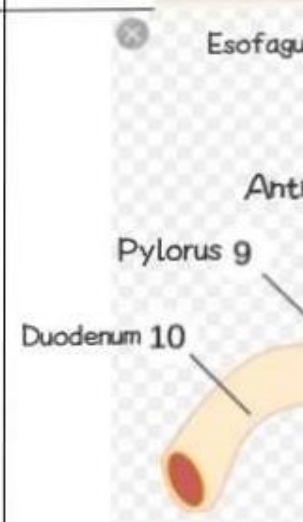
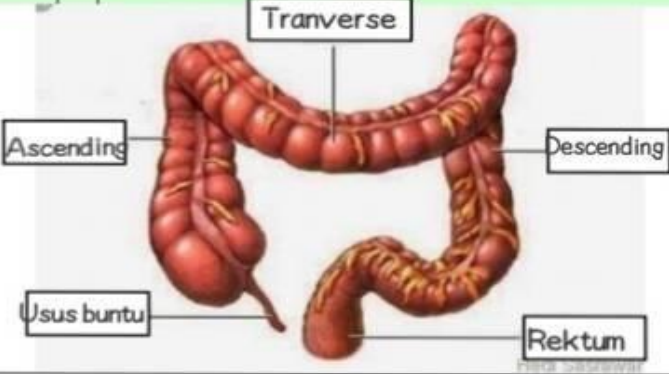


WORKSHEETS (LEMBAR KERJA)

Mata Kuliah : Anatomi
 Materi : Anatomi Digesti
 NIM>Nama Mahasiswa : Abriel eka zulfani/2110101128

No	Keterangan	Pembahasan
1	 <p> 1 Kelenjar ludah 2 Parotis 3 Submandibularis 4 Sublingualis 6 Amandel 7 Lidah 8 Esofagus 9 Pankreas 10 Lambung 11 Saluran pankreas 12 Hati 13 Kantung empedu 14 Duodenum 15 Saluran empedu 16 Kolon 17 Kolon transversum 18 Kolon ascenden 19 Kolon descenden 20 Ileum 21 Sekum 22 Appendiks/Unbai cacing 23 Rektum/ Poros usus 24 Anus </p>	
	 <p> 1 Esofagus 2 Cardia 3 Fundus 4 Mucosa 5 Layers of muscle 6 Gastric rugae 7 Body 8 Antrum 9 Pylorus 10 Duodenum </p>	

No	Keterangan	Pembahasan
		 <p>The diagram illustrates the large intestine (colon) and its associated structures. The main components are labeled as follows:</p> <ul style="list-style-type: none">Ascending: The upper right portion of the large intestine.Transverse: The upper horizontal portion of the large intestine.Descending: The lower right portion of the large intestine.Usus buntu: The cecum, a pouch-like structure at the beginning of the large intestine.Rektum: The rectum, the terminal part of the large intestine. <p>The diagram shows the characteristic haustra (pouches) of the large intestine. The labels are connected to the corresponding parts of the organ by thin lines.</p>