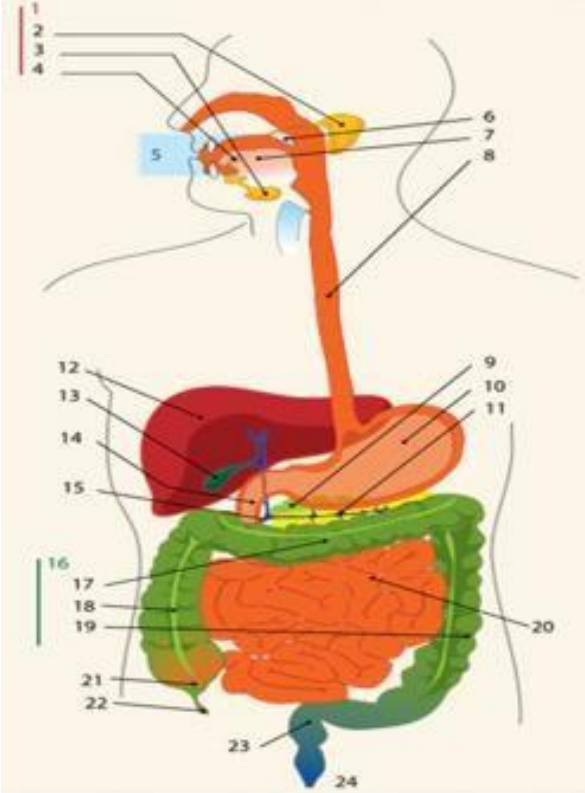
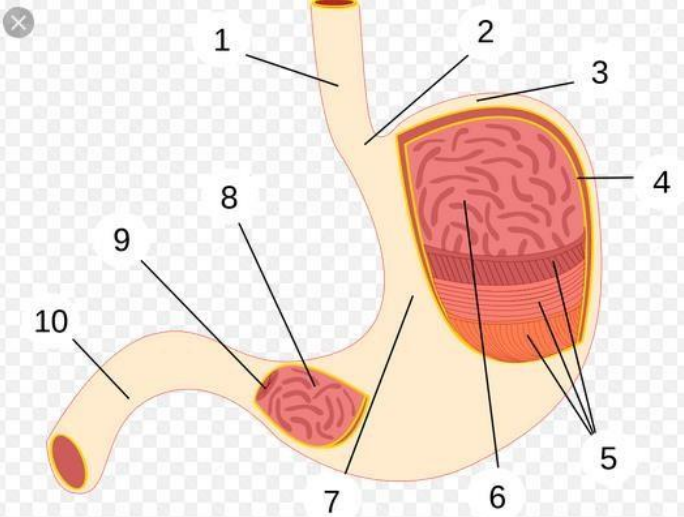
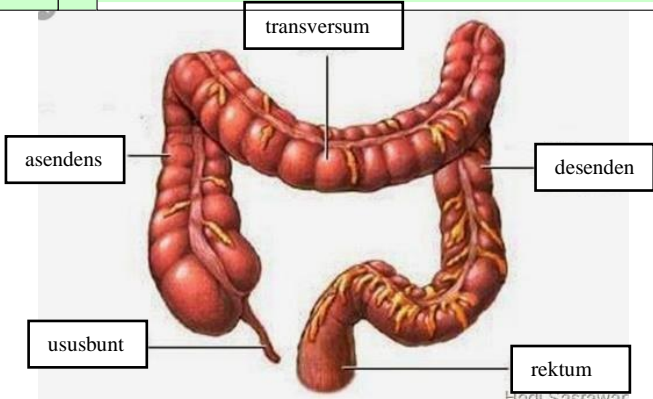


**WORKSHEETS (LEMBAR KERJA)**

<b>Mata Kuliah</b>	: <b>Anatomi</b>
<b>Materi</b>	: <b>Anatomi Digesti</b>
<b>NIM&gt;Nama Mahasiswa</b>	: <b>Fera Widiawati 2110101072</b>

No	Keterangan	Pembahasan
1	<ol style="list-style-type: none"> <li>1.kelenjar ludah</li> <li>2.parotis</li> <li>3.bawah rahang</li> <li>4.bawah lidah</li> <li>5.rongga mulut</li> <li>6.amandel</li> <li>7.lidah</li> <li>8.esofagus</li> <li>9.pankreas</li> <li>10.lambung</li> <li>11.saluran pancreas</li> <li>12.hati</li> <li>13kantung empedu</li> <li>14.duodenum</li> <li>15.saluran empedu</li> <li>16.kolon</li> <li>17.kolon transversum</li> <li>18.kolon ascenden</li> <li>19.kolon descenden</li> <li>20.Ileum</li> <li>21.seklum</li> <li>22.appendiks/umbal cacing</li> <li>23.rektum/poros usus</li> <li>24.anus</li> </ol>	
	<ol style="list-style-type: none"> <li>1.esofagus</li> <li>2.kardia</li> <li>3.fondus</li> <li>4.selaput lender</li> <li>5.otot lapisan</li> <li>6.lambung mukosa</li> <li>7.tubuh perut</li> <li>8.polirik antrum</li> <li>9.pilorus</li> <li>10.usus dua belas jari</li> </ol>	

df

No	Keterangan	Pembahasan
		 <p>The diagram illustrates the large intestine (colon) with the following labeled parts:</p> <ul style="list-style-type: none"><li><b>transversum</b>: The transverse colon, the upper horizontal part.</li><li><b>asendens</b>: The ascending colon, the vertical part on the right side.</li><li><b>desenden</b>: The descending colon, the vertical part on the left side.</li><li><b>ususbunt</b>: The sigmoid colon, the S-shaped part at the bottom left.</li><li><b>rektum</b>: The rectum, the final straight part of the large intestine.</li></ul> <p><small>Hedi Sasrawar</small></p>