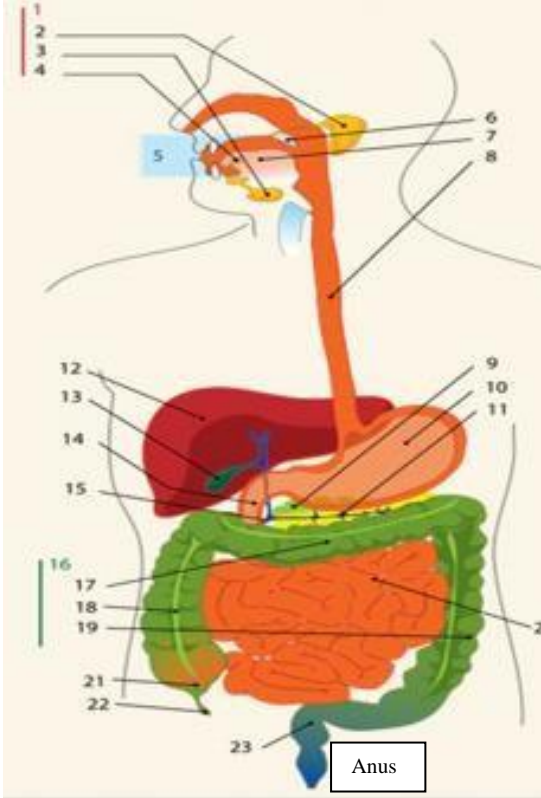
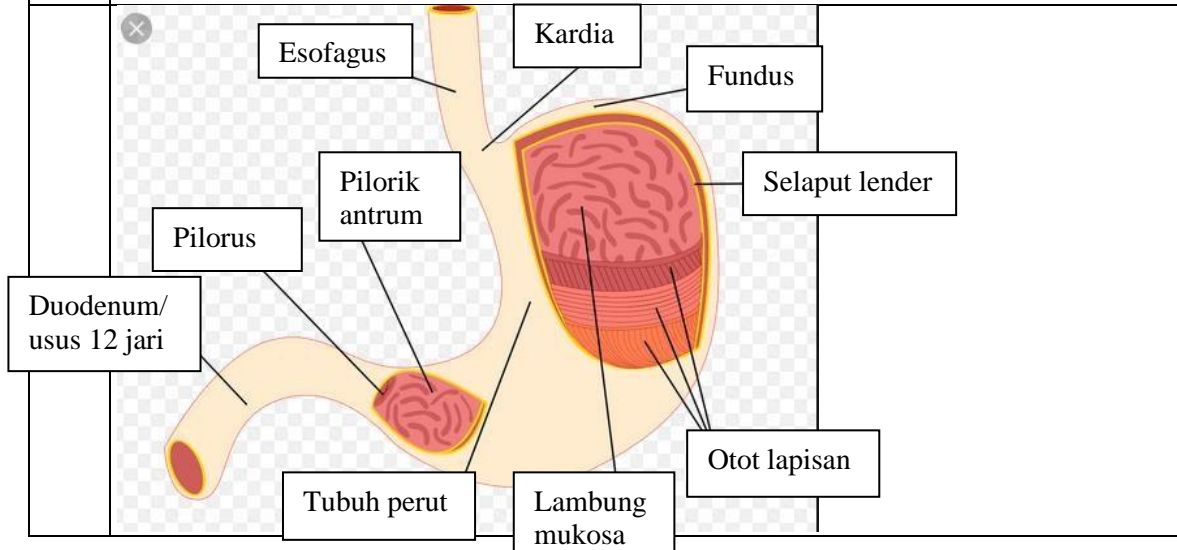


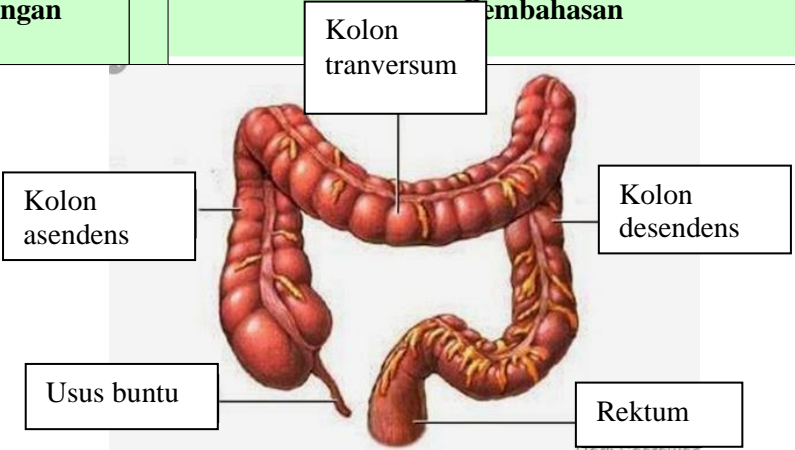
WORKSHEETS (LEMBAR KERJA)

Mata Kuliah	: Anatomi
Materi	: Anatomi Digesti
NIM>Nama Mahasiswa	: MARIANA ULFA_2110101111

No	Keterangan	Pembahasan
----	------------	------------

1		<p>KETERANGAN</p> <ol style="list-style-type: none"> 1.kelenjar ludah 2.parotis 3.submandibularis/bawah rahang 4.sublingualis 5.rongga mulut 6.amandel 7.lidah 8.esofagus 9.pankreas 10.lambung 11.saluran pankreas 12.hati 13.kantung empedu 14.duodenum 15.saluran empedu 16.kolon 17.kolon tranversum 18.kolon ascendens 19.kolon desedens 20.ileum 21.sekum 22.appendiks/usus buntu/umbar cacing 23.rektum 24.anus
---	--	---



No	Keterangan	Pembahasan
		 <p>The diagram illustrates the large intestine (colon) and its associated structures. The main components are labeled as follows:</p> <ul style="list-style-type: none"> Kolon asendens: The ascending colon, located on the right side of the abdomen. Usus buntu: The cecum, a pouch-like structure at the beginning of the large intestine. Kolon transversum: The transverse colon, the upper horizontal part of the large intestine. Kolon desendens: The descending colon, located on the left side of the abdomen. Rektum: The rectum, the final straight part of the large intestine. <p><small>Hedi Sasrawati</small></p>